


Name : _____

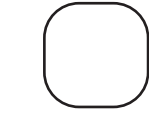
Who has More?

How much money does each child have in her/his pouch? Use $<$ or $>$ symbols to figure out who has more?


1) Sam has \$ _____



A pouch containing a 10 dollar bill, a 5 dollar bill, and five 1 dollar coins.



Ava has \$ _____

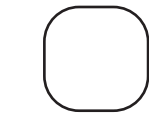


A pouch containing a 10 dollar bill and five 1 dollar coins.

2) Liam has \$ _____



A pouch containing a 50 dollar bill, a 20 dollar bill, a 1 dollar coin, and three 2 dollar coins.



Emily has \$ _____

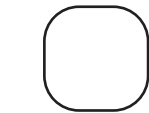


A pouch containing a 50 dollar bill, a 10 dollar bill, a 10 dollar bill, a 1 dollar coin, and three 2 dollar coins.


3) Felix has \$ _____



A pouch containing a 20 dollar bill, a 5 dollar bill, and seven 1 dollar coins.




Sadie has \$ _____




A pouch containing a 1 dollar coin, three 2 dollar coins, a 5 dollar bill, and two 10 dollar bills.

4) Noah has \$ _____



A pouch containing a 100 dollar bill, a 10 dollar bill, and five 1 dollar coins.




Nora has \$ _____




A pouch containing a 5 dollar bill, a 50 dollar bill, a 1 dollar coin, a 50 dollar bill, a 5 dollar bill, and a 1 dollar coin.

5) Carol has \$ _____



A pouch containing a 1 dollar coin, a 1 dollar coin, a 1 dollar coin, a 1 dollar coin, a 5 dollar bill, and a 50 dollar bill.



Hugo has \$ _____



A pouch containing a 50 dollar bill, a 10 dollar bill, and five 1 dollar coins.