


Name : _____

Who has More?

How much money does each child have in her/his pouch? Use $<$ or $>$ symbols to figure out who has more?

1) David has \$ _____




Malik has \$ _____



2) Alex has \$ _____




_____ has \$ _____




3) Ethan has \$ _____



_____ has \$ _____




4) Tyler has \$ _____




_____ has \$ _____



5) Romy has \$ _____



Rose has \$ _____



PREVIEW

Gain complete access to the largest collection of worksheets in all subjects!

Members, please log in to download this worksheet.

Not a member? Please sign up to gain complete access.

www.mathworksheets4kids.com