


Name : _____

Who has More?

How much money does each child have in her/his pouch? Use < or > symbols to figure out who has more?

1) Milan has \$ _____



Jake has \$ _____



2) Loik has \$ _____



PREVIEW


Gain complete access to the largest collection of worksheets in all subjects!

Members, please log in to download this worksheet.

Not a member? Please sign up to gain complete access.

www.mathworksheets4kids.com


_____ has \$ _____



3) Enzo has \$ _____



_____ has \$ _____




4) Eliot has \$ _____



_____ has \$ _____



5) Jacob has \$ _____



Maya has \$ _____

