



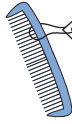

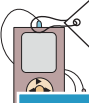
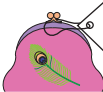




Ordering Money

A) Arrange the price from the least to the greatest.

| | | | | |
|--|---|---|--|--|
|  <p>\$14.59</p> |  <p>\$7.93</p> |  <p>\$4.95</p> |  <p>\$7.39</p> |  <p>\$11.99</p> |
|--|---|---|--|--|






| | | | | |
|--|--|--|---|--|
|  <p>\$17.56</p> |  <p>\$35.46</p> |  <p>\$42.65</p> |  <p>\$22.56</p> |  <p>\$12.56</p> |
|--|--|--|---|--|

| | | |
|---|--|---|
|  <p>\$35.15</p> |  <p>\$7.19</p> |  <p>\$15.18</p> |
|---|--|---|

B) Arrange the price

| | |
|--|--|
|  <p>\$65.20</p> |  <p>\$22.70</p> |
|--|--|

| | | |
|--|--|--|
|  <p>\$69.83</p> |  <p>\$54.33</p> |  <p>\$39.93</p> |
|--|--|--|

| | | | | |
|--|--|--|---|--|
|  <p>\$43.30</p> |  <p>\$23.10</p> |  <p>\$19.20</p> |  <p>\$62.70</p> |  <p>\$85.40</p> |
|--|--|--|---|--|

PREVIEW

Gain complete access to the largest collection of worksheets in all subjects!

Members, please log in to download this worksheet.

Not a member? Please sign up to gain complete access.

www.mathworksheets4kids.com