

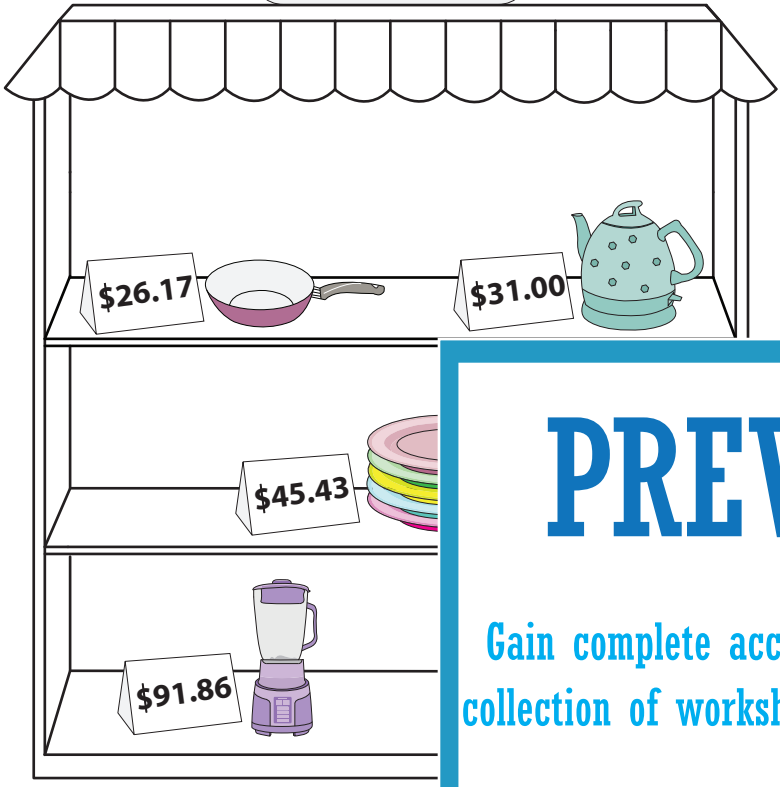
Name: _____

Where Should I Buy?

Compare the price of the items in the two stores and write the better buy.

Store 1

Store 2




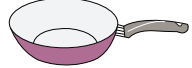

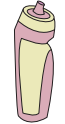

PREVIEW

Gain complete access to the largest collection of worksheets in all subjects!

Members, please log in to download this worksheet.

Not a member? Please sign up to gain complete access.

www.mathworksheets4kids.com

| S.No | Items | | Store 2 | | | Better Buy |
|------|---|--|---------|--|--|------------|
| 1) |  | | | | | |
| 2) |  | | | | | |
| 3) |  | | | | | |
| 4) |  | | | | | |
| 5) |  | | | | | |

Where Should I Buy?

Compare the price of the items in the two stores and write the better buy.

Store 1

Store 2



PREVIEW

Gain complete access to the largest collection of worksheets in all subjects!

Members, please log in to download this worksheet.

Not a member? Please sign up to gain complete access.

www.mathworksheets4kids.com

| S.No | Items | Store 1 Price | Comparison | Store 2 Price | Better Buy |
|------|-------|---------------|------------|---------------|------------|
| 1) | | \$45.43 | > | \$46.32 | Store 1 |
| 2) | | \$26.17 | < | \$26.17 | Store 2 |
| 3) | | \$31.00 | < | \$33.50 | Store 1 |
| 4) | | \$13.37 | > | \$12.90 | Store 2 |
| 5) | | \$91.86 | < | \$94.25 | Store 1 |