


Name : _____

Comparing Coins

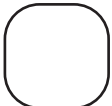
Count the coins in each pouch. Use $<$, $>$ or $=$ symbols to compare the money.

1) £ _____




£ _____

2) £ _____




£ _____

3) £ _____




£ _____

4) £ _____



£ _____

5) £ _____



£ _____

Name : _____

Comparing Coins

Count the coins in each pouch. Use $<$, $>$ or $=$ symbols to compare the money.

1) £ 2.23

$<$

£ 2.32

2) £ 3.61

$>$

£ 3.58

3) £ 7.53

$<$

£ 8.02

4) £ 5.38

$=$

£ 5.38

5) £ 0.99

$>$

£ 0.94