


Name : _____

Who has More?


Sheet 2

How much money does each child have in her/his pouch? Use $<$ or $>$ symbols to figure out who has more?


1) Grace has £ _____



Theo has £ _____



2) Mila has £ _____




_____ has £ _____



3) Ollie has £ _____



_____ has £ _____



4) Zoey has £ _____



_____ has £ _____



5) Liam has £ _____



Riley has £ _____



PREVIEW

Gain complete access to the largest collection of worksheets in all subjects!

Members, please log in to download this worksheet.

Not a member? Please sign up to gain complete access.

www.mathworksheets4kids.com

Name : _____

Who has More?

How much money does each child have in her/his pouch? Use < or > symbols to figure out who has more?

1) Grace has £ 40.32

>

Grace

Theo has £ 40.17

2) Mila has £ 85

PREVIEW

Gain complete access to the largest collection of worksheets in all subjects!

Members, please log in to download this worksheet.

Not a member? Please sign up to gain complete access.

www.mathworksheets4kids.com

Ellis has £ 83.62

3) Ollie has £ 68

Ellis has £ 76.25

4) Zoey has £ 56

Ellis

Ellis has £ 57.36

5) Liam has £ 23.00

>

Liam

Riley has £ 14.00