


Name : _____


Who has More?

How much money does each child have in her/his pouch? Use $<$ or $>$ symbols to figure out who has more?


1) Manson has £ _____



Zora has £ _____



2) Ellijah has £ _____



PREVIEW


Gain complete access to the largest collection of worksheets in all subjects!

Members, please log in to download this worksheet.

Not a member? Please sign up to gain complete access.

www.mathworksheets4kids.com

3) _____ has £ _____



3) Bella has £ _____



4) _____ has £ _____




4) Ezra has £ _____



5) _____ has £ _____



5) Rachel has £ _____



Geller has £ _____



Name : _____

Who has More?

How much money does each child have in her/his pouch? Use < or > symbols to figure out who has more?

1) Manson has £ 67.13

Zora has £ 72.64

<

Zora

2) Ellijah has £ 46

Ellijah has £ 50.93

3) Bella has £ 21

Bella has £ 16.00

4) Ezra has £ 38

Ezra has £ 33.72

Ezra

5) Rachel has £ 89.25

Geller has £ 92.05

<

Geller

PREVIEW

Gain complete access to the largest collection of worksheets in all subjects!

Members, please log in to download this worksheet.

Not a member? Please sign up to gain complete access.

www.mathworksheets4kids.com