

Is There Enough Money?

Calculate the money in Lily's bank. Check the items that she does have enough money to buy.



The total amount of money in the bank is £ _____

PREVIEW

Gain complete access to the largest collection of worksheets in all subjects!

Members, please log in to download this worksheet.

Not a member? Please sign up to gain complete access.

www.mathworksheets4kids.com

S.No		Items that Lily can buy
1)		
2)		
3)		
4)	<div style="display: flex; align-items: center; justify-content: center;"> <div style="margin-left: 20px;">£15.99</div> </div>	
5)	<div style="display: flex; align-items: center; justify-content: center;"> <div style="margin-left: 20px;">£37.75</div> </div>	

Name : _____

Is There Enough Money?

Calculate the money in Lily's bank. Check the items that she does have enough money to buy.



The total amount of money in the bank is £ 62.00





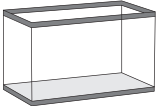
PREVIEW

Gain complete access to the largest collection of worksheets in all subjects!

Members, please log in to download this worksheet.

Not a member? Please sign up to gain complete access.

www.mathworksheets4kids.com

S.No		Items that Lily can buy
1)		✗
2)		✓
3)		✓
4)	 £15.99	✓
5)	 £37.75	✓