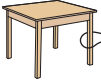










Ordering Money

A) Arrange the price from the least to the greatest.

 <p>£19.04</p>	 <p>£20.43</p>	 <p>£74.59</p>	 <p>£35.70</p>	 <p>£7.04</p>
---	---	---	--	--






 <p>£24.15</p>	 <p>£45.21</p>	 <p>£48.66</p>	 <p>£32.89</p>	 <p>£14.66</p>
---	---	---	--	---

 <p>£21.93</p>		 <p>£37.93</p>
--	--	--

B) Arrange the price

 <p>£19.91</p>		 <p>£7.19</p>
---	---	--

 <p>£18.99</p>	 <p>£31.50</p>		 <p>£30.00</p>
---	---	---	---

 <p>£2.87</p>	 <p>£13.94</p>	 <p>£29.38</p>	 <p>£12.24</p>	 <p>£24.87</p>
--	---	---	--	---

PREVIEW

Gain complete access to the largest collection of worksheets in all subjects!

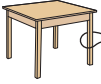




Members, please log in to download this worksheet.

Not a member? Please sign up to gain complete access.





www.mathworksheets4kids.com

Ordering Money

A) Arrange the price from the least to the greatest.

 <p>£19.04</p>	 <p>£20.43</p>	 <p>£74.59</p>	 <p>£35.70</p>	 <p>£7.04</p>
---	---	---	--	--

£7.04, £19.04, £20.43, £35.70, £74.59

 <p>£24.15</p>	 <p>£45.21</p>	 <p>£48.66</p>	 <p>£32.89</p>	 <p>£14.66</p>
---	---	---	--	---






 <p>£21.93</p>	 <p>£19.55</p>	 <p>£37.93</p>
--	--	--

B) Arrange the price

 <p>£19.91</p>	 <p>£13.25</p>	 <p>£7.19</p>
---	---	--

 <p>£18.99</p>	 <p>£31.50</p>	 <p>£24.00</p>	 <p>£30.00</p>
---	---	---	---

£31.50, £30.00, £24.00, £18.99, £13.25

 <p>£2.87</p>	 <p>£13.94</p>	 <p>£29.38</p>	 <p>£12.24</p>	 <p>£24.87</p>
--	---	---	--	---

£29.38, £24.87, £13.94, £12.24, £2.87

PREVIEW

Gain complete access to the largest collection of worksheets in all subjects!

Members, please log in to download this worksheet.

Not a member? Please sign up to gain complete access.

www.mathworksheets4kids.com