
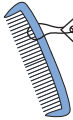





# Ordering Money

A) Arrange the price from the least to the greatest.

 <p>£7.20</p>	 <p>£6.97</p>	 <p>£12.20</p>	 <p>£3.02</p>	 <p>£4.05</p>
--	--	---	---	--

---

 <p>£14.88</p>	 <p>£25.68</p>	 <p>£18.49</p>	 <p>£20.25</p>	 <p>£21.25</p>
---	---	---	--	---

---

 <p>£48.99</p>	 <p>£2.18</p>	 <p>£23.17</p>
--	---	--

---

## PREVIEW

Gain complete access to the largest collection of worksheets in all subjects!

Members, please log in to download this worksheet.

Not a member? Please sign up to gain complete access.

[www.mathworksheets4kids.com](http://www.mathworksheets4kids.com)






B) Arrange the price

 <p>£19.53</p>	 <p>£1.98</p>	 <p>£22.13</p>
---	--	---

---

 <p>£49.87</p>	 <p>£1.78</p>	 <p>£1.78</p>	 <p>£1.78</p>	 <p>£39.94</p>
---	--	--	---	---


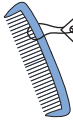

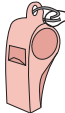

---

 <p>£13.75</p>	 <p>£21.72</p>	 <p>£38.10</p>	 <p>£30.75</p>	 <p>£55.30</p>
---	---	---	--	---

---

**Ordering Money**

A) Arrange the price from the least to the greatest.

 £7.20	 £6.97	 £12.20	 £3.02	 £4.05
---	---	--	--	---

**£3.02, £4.05, £6.97, £7.20, £12.20**

 £14.88	 £25.68	 £18.49	 £20.25	 £21.25
--	--	--	---	--






 £48.99		 £2.18	 £23.17
---	--	---	---

B) Arrange the price

 £19.53		 £22.13	 £9.98
--	---	--	---

 £49.87			 £11.78	 £39.94
--	---	---	--	--

**£61.04, £49.87, £39.94, £36.04, £11.78**

 £13.75	 £21.72	 £38.10	 £30.75	 £55.30
--	--	--	---	--

**£55.30, £38.10, £30.75, £21.72, £13.75**

**PREVIEW**

Gain complete access to the largest collection of worksheets in all subjects!

Members, please log in to download this worksheet.

Not a member? Please sign up to gain complete access.

[www.mathworksheets4kids.com](http://www.mathworksheets4kids.com)