




# Saving Money

Find the total amount in each piggy bank and answer the questions.



## PREVIEW

Gain complete access to the largest collection of worksheets in all subjects!

Members, please log in to download this worksheet.




Not a member? Please sign up to gain complete access.

[www.mathworksheets4kids.com](http://www.mathworksheets4kids.com)

- 1) Who has the least amount of money in their piggy banks? \_\_\_\_\_
- 2) Who has saved more, Dana or Rick? \_\_\_\_\_
- 3) Who has saved the same amount as Frank? \_\_\_\_\_
- 4) Of all the kids, who has saved the most money? \_\_\_\_\_
- 5) Arrange the amounts saved in the piggy banks from the least to the greatest.  
\_\_\_\_\_

**Saving Money**

Find the total amount in each piggy bank and answer the questions.



**PREVIEW**

Gain complete access to the largest collection of worksheets in all subjects!

Members, please log in to download this worksheet.

Not a member? Please sign up to gain complete access.

[www.mathworksheets4kids.com](http://www.mathworksheets4kids.com)

1) Who has the least amount of money in their piggy banks?

Jenny

2) Who has saved more, Dana or Rick?

Dana

3) Who has saved the same amount as Frank?

Tara

4) Of all the kids, who has saved the most money?

Victor

5) Arrange the amounts saved in the piggy banks from the least to the greatest.

**£83.00, £92.10, £103.71, £105.35, £120.08**