

Cheap or Expensive?

A) Identify and check the cheapest item in each set.

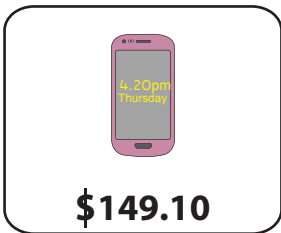
1)



2)



3)




PREVIEW

Gain complete access to the largest collection of worksheets in all subjects!

Members, please log in to download this worksheet.

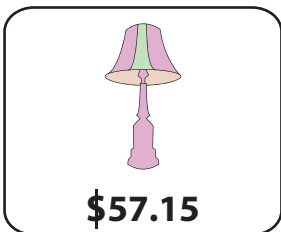
Not a member? Please sign up to gain complete access.

www.mathworksheets4kids.com





B) Identify and check

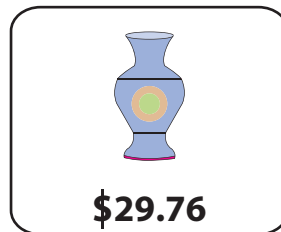
1)



2)



3)



Cheap or Expensive?

A) Identify and check the cheapest item in each set.

1)



\$39.99



\$35.99



\$34.99





\$37.99

2)

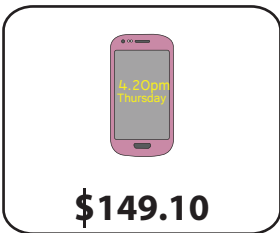


\$45.00



\$42.98

3)



\$149.10

PREVIEW

Gain complete access to the largest collection of worksheets in all subjects!

Members, please log in to download this worksheet.

Not a member? Please sign up to gain complete access.

www.mathworksheets4kids.com



\$136.80

B) Identify and check

1)




\$57.15




\$59.26


2)



\$14.97



\$12.74



\$13.12



\$12.88

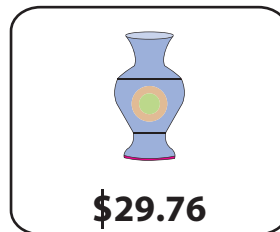
3)



\$29.82



\$29.50



\$29.76



\$29.91