

Cheap or Expensive?

A) Identify and check the cheapest item in each set.


1)

**\$11.95****\$12.88****\$14.65****\$11.99**

2)

**\$29.91****\$20.85**

3)

**\$33.10****\$34.20**

PREVIEW

Gain complete access to the largest
collection of worksheets in all subjects!

Members, please
log in to
download this
worksheet.

Not a member?
Please sign up to
gain complete
access.

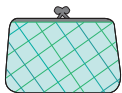
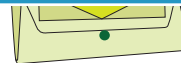
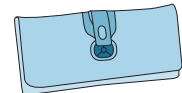
www.mathworksheets4kids.com

B) Identify and check the cheapest item in each set.


1)

**\$8.97****\$9.98**

2)

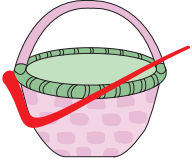
**\$19.97****\$19.91****\$19.99****\$19.95**

3)

**\$63.91****\$64.55****\$60.25****\$61.42**

Cheap or Expensive?

A) Identify and check the cheapest item in each set.

1) 
\$11.95



\$12.88


\$14.65


\$11.99

2) 
\$29.91






\$20.85

3) 
\$33.10


\$34.20

PREVIEW

Gain complete access to the largest collection of worksheets in all subjects!

Members, please log in to download this worksheet.

Not a member? Please sign up to gain complete access.

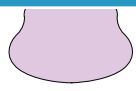
www.mathworksheets4kids.com

B) Identify and check

1) 
\$8.97



\$9.98

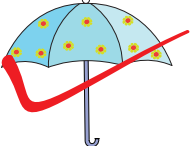
2) 
\$19.97



\$19.91


\$19.99


\$19.95

3) 
\$63.91


\$64.55


\$60.25


\$61.42