


Name: \_\_\_\_\_

# Who has More?

How much money does each child have in her/his pouch? Use < or > symbols to figure out who has more?


1) Owen has \$ \_\_\_\_\_



Mason has \$ \_\_\_\_\_




2) Lucas has \$ \_\_\_\_\_



\_\_\_\_\_ has \$ \_\_\_\_\_




3) Brian has \$ \_\_\_\_\_




\_\_\_\_\_ has \$ \_\_\_\_\_




4) Liam has \$ \_\_\_\_\_




\_\_\_\_\_ has \$ \_\_\_\_\_



5) Gregor has \$ \_\_\_\_\_



Caitlyn has \$ \_\_\_\_\_



**PREVIEW**

Gain complete access to the largest collection of worksheets in all subjects!

Members, please log in to download this worksheet.

Not a member? Please sign up to gain complete access.

[www.mathworksheets4kids.com](http://www.mathworksheets4kids.com)

Name: \_\_\_\_\_

# Who has More?

How much money does each child have in her/his pouch? Use < or > symbols to figure out who has more?

1) Owen has \$ 13.26

Mason has \$ 12.95

>

Owen

2) Lucas has \$ 60

has \$ 61.56

3) Brian has \$ 81

has \$ 81.40

4) Liam has \$ 100

has \$ 100.21

Liam

5) Gregor has \$ 6.45

Caitlyn has \$ 5.09

>

Gregor

**PREVIEW**

Gain complete access to the largest collection of worksheets in all subjects!

Members, please log in to download this worksheet.

Not a member? Please sign up to gain complete access.

[www.mathworksheets4kids.com](http://www.mathworksheets4kids.com)