

Name: \_\_\_\_\_

# Is There Enough Money?

Calculate the money in Mike's bank. Check the items that he does have enough money to buy.



The total amount of money in the bank is \$ \_\_\_\_\_

## PREVIEW

Gain complete access to the largest collection of worksheets in all subjects!

Members, please log in to download this worksheet.

Not a member? Please sign up to gain complete access.

[www.mathworksheets4kids.com](http://www.mathworksheets4kids.com)

S.No			Items that Mike can buy
1)			
2)			
3)			
4)		\$273.15	
5)		\$211.16	

Name: \_\_\_\_\_

## Is There Enough Money?

Calculate the money in Mike's bank. Check the items that he does have enough money to buy.



The total amount of money in the bank is \$ 251.26



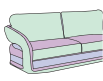
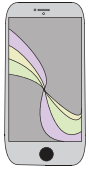

# PREVIEW

Gain complete access to the largest collection of worksheets in all subjects!

Members, please log in to download this worksheet.

Not a member? Please sign up to gain complete access.

[www.mathworksheets4kids.com](http://www.mathworksheets4kids.com)

S.No		Items that Mike can buy
1)		✓
2)		✓
3)		✓
4)	 \$273.15	✗
5)	 \$211.16	✓