





# Saving Money

Find the total amount in each piggy bank and answer the questions.



**PREVIEW**

Gain complete access to the largest collection of worksheets in all subjects!

Members, please log in to download this worksheet.


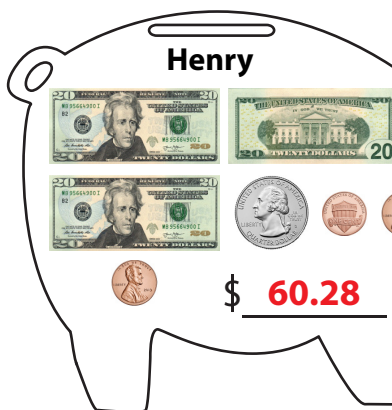

Not a member? Please sign up to gain complete access.

[www.mathworksheets4kids.com](http://www.mathworksheets4kids.com)

- 1) Who has saved the same amount as Henry: \_\_\_\_\_
- 2) Who has saved more, Johnson or Mia? \_\_\_\_\_
- 3) Who has the least amount of money in their piggy banks? \_\_\_\_\_
- 4) Of all the kids, who has saved the most money? \_\_\_\_\_
- 5) Arrange the amounts saved in the piggy banks from the greatest to the least.  
\_\_\_\_\_

**Saving Money**

Find the total amount in each piggy bank and answer the questions.



**PREVIEW**

Gain complete access to the largest collection of worksheets in all subjects!

Members, please log in to download this worksheet.

Not a member? Please sign up to gain complete access.

[www.mathworksheets4kids.com](http://www.mathworksheets4kids.com)

- 1) Who has saved the same amount as Henry: \_\_\_\_\_ **Thomas**
- 2) Who has saved more, Johnson or Mia? \_\_\_\_\_ **Mia**
- 3) Who has the least amount of money in their piggy banks? \_\_\_\_\_ **Samuel**
- 4) Of all the kids, who has saved the most money? \_\_\_\_\_ **Clark**
- 5) Arrange the amounts saved in the piggy banks from the greatest to the least.

**\$210.54, \$106.55, \$91.30, \$60.28, \$55.67**