

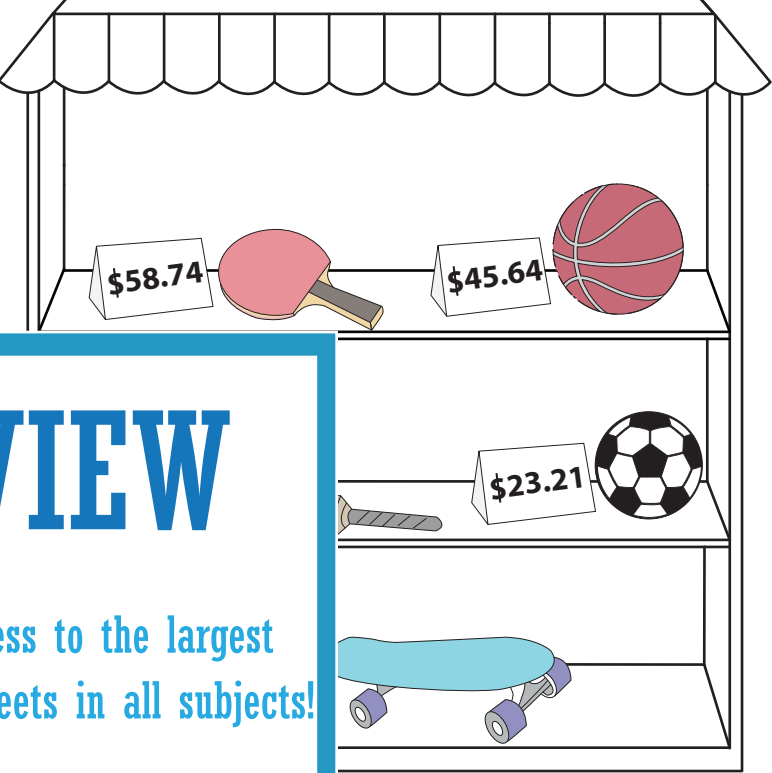
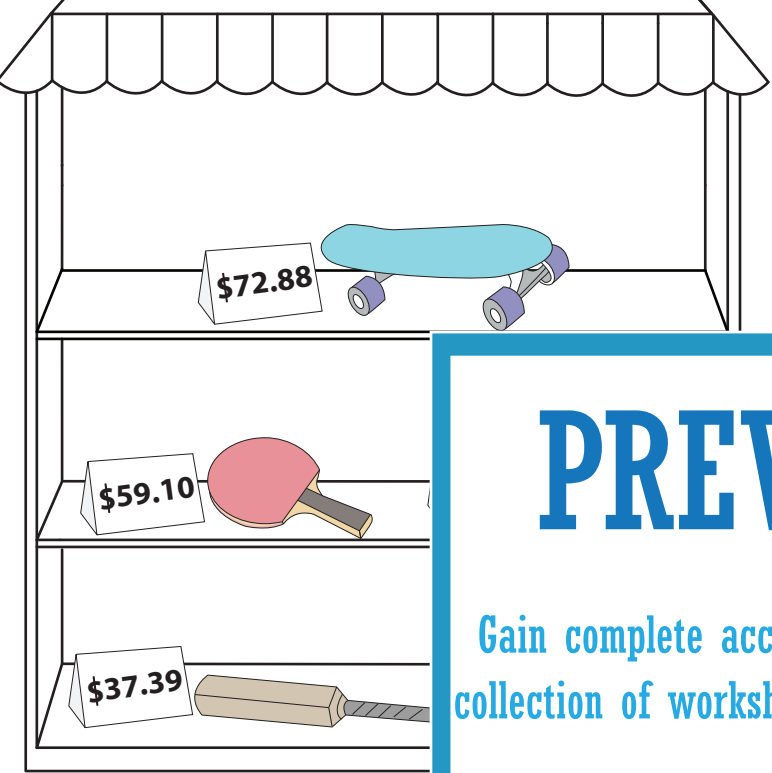
Name: \_\_\_\_\_

# Where Should I Buy?

Compare the price of the items in the two stores and write the better buy.

Store 1

Store 2



## PREVIEW

Gain complete access to the largest collection of worksheets in all subjects!

Members, please log in to download this worksheet.

Not a member? Please sign up to gain complete access.

www.mathworksheets4kids.com

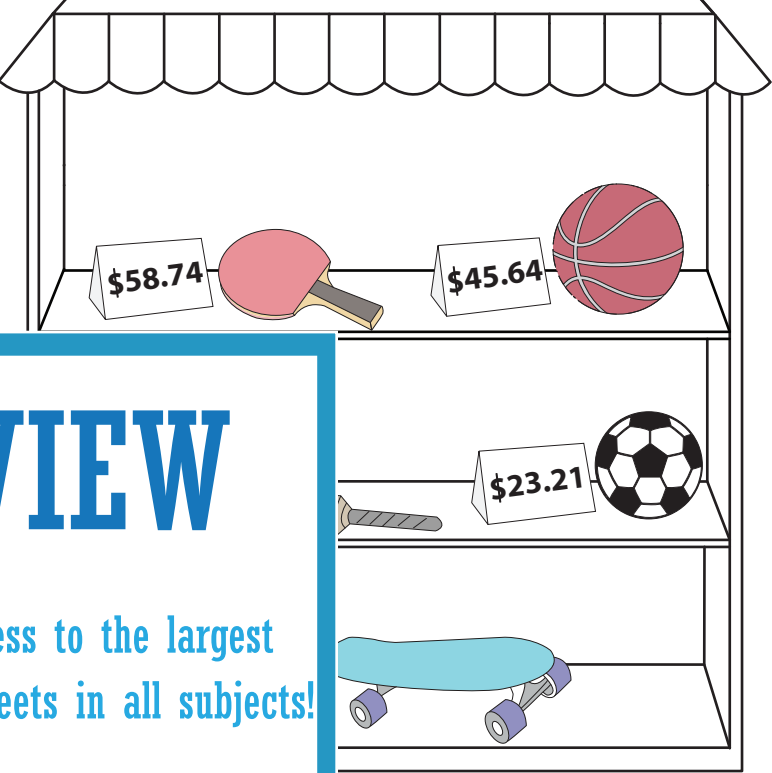
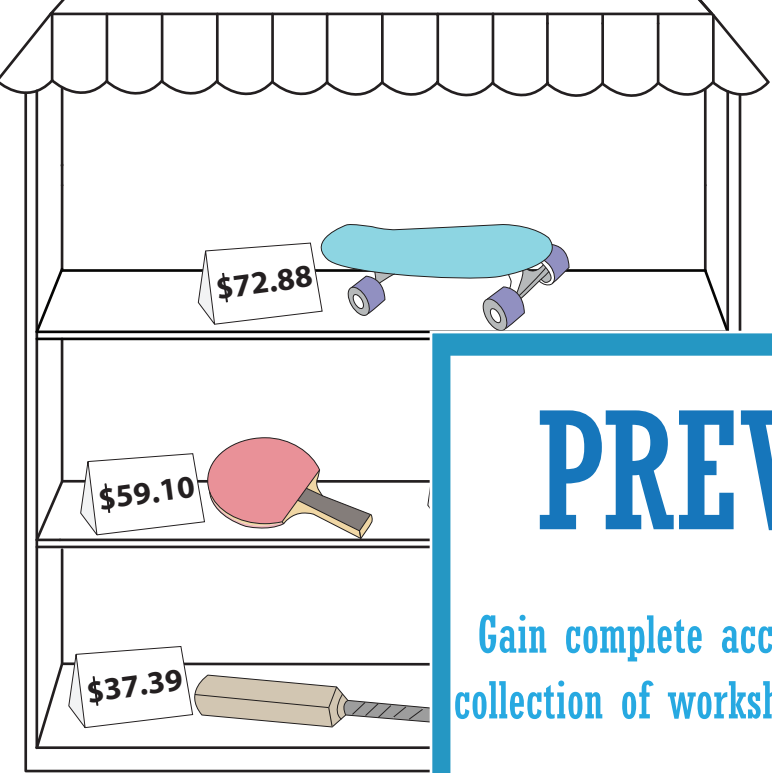
S.No	Items	Store 1	Store 2	Better Buy
1)		\$72.88		
2)		\$37.39		
3)		\$59.10	\$58.74	
4)			\$45.64	
5)			\$23.21	

**Where Should I Buy?**

Compare the price of the items in the two stores and write the better buy.

**Store 1**

**Store 2**



**PREVIEW**

Gain complete access to the largest collection of worksheets in all subjects!

Members, please log in to download this worksheet.

Not a member? Please sign up to gain complete access.

[www.mathworksheets4kids.com](http://www.mathworksheets4kids.com)

S.No	Items	Store 1 Price	Comparison	Store 2 Price	Better Buy
1)		\$72.88	>	\$58.74	Store 2
2)		\$37.39	<	\$23.21	Store 1
3)		\$59.10	>	\$58.74	Store 2
4)		\$45.46	<	\$45.64	Store 1
5)		\$21.83	<	\$23.21	Store 1