

Name : _____

Score : _____


Sheet 2

Counting Dimes




Count the dimes and write the total amount.

| | | |
|--------------------|--|---------|
| 1) | | _____ ¢ |
| 2) | <div data-bbox="446 750 1141 1668" style="border: 2px solid blue; padding: 10px; text-align: center;"> <h2 style="color: blue;">PREVIEW</h2> <p style="color: blue;">Access the largest collection of worksheets for just \$19.95 per year!</p> <div style="display: flex; justify-content: space-around;"> <div style="background-color: #007bff; color: white; padding: 5px; width: 150px;"> <p>Members, please log in to download this worksheet.</p> <p style="background-color: white; color: red; border-radius: 10px; padding: 2px 5px; display: inline-block;">Log in</p> </div> <div style="background-color: #007bff; color: white; padding: 5px; width: 150px;"> <p>Not a member? Please sign up to gain complete access.</p> <p style="background-color: white; color: red; border-radius: 10px; padding: 2px 5px; display: inline-block;">Sign up</p> </div> </div> <p style="color: blue; font-size: small;">www.mathworksheets4kids.com</p> </div> | _____ ¢ |
| 3) | | _____ ¢ |
| 4) | | _____ ¢ |
| 5) 9 dimes = _____ | | _____ ¢ |



8) If a train toy costs 50 ¢, how many dimes do you need to buy it?

_____ dimes



_____ ¢

Name : _____

Answer key

Score : _____


Counting Dimes

Sheet 2




Count the dimes and write the total amount.

| | | |
|------------------------|--|-------------------|
| 1) | | <u>60</u> ¢ |
| 2) | <div style="border: 2px solid blue; padding: 10px; text-align: center;"> <h1>PREVIEW</h1> <p>Access the largest collection of worksheets for just \$19.95 per year!</p> <div style="display: flex; justify-content: space-around;"> <div style="background-color: #007bff; color: white; padding: 5px; text-align: center;"> <p>Members, please log in to download this worksheet.</p> <p>Log in</p> </div> <div style="background-color: #007bff; color: white; padding: 5px; text-align: center;"> <p>Not a member? Please sign up to gain complete access.</p> <p>Sign up</p> </div> </div> <p>www.mathworksheets4kids.com</p> </div> | <u>40</u> ¢ |
| 3) | | <u>70</u> ¢ |
| 4) | | <u>20</u> ¢ |
| 5) 9 dimes = <u>90</u> | | mes = <u>30</u> ¢ |



8) If a train toy costs 50 ¢, how many dimes do you need to buy it?

5 dimes



ch money will you pay?

80 ¢