

Name : _____

Score : _____


Counting Dimes

Sheet 3



Count the dimes and write the total amount.

1)		_____ ¢
2)	<div style="border: 2px solid blue; padding: 10px; text-align: center;"> <h2 style="color: blue;">PREVIEW</h2> <p style="color: blue;">Access the largest collection of worksheets for just \$19.95 per year!</p> <div style="display: flex; justify-content: space-around;"> <div style="background-color: #007bff; color: white; padding: 5px; transform: rotate(-5deg);"> <p>Members, please log in to download this worksheet.</p> <p style="background-color: white; color: red; border-radius: 10px; padding: 2px 5px; display: inline-block;">Log in</p> </div> <div style="background-color: #007bff; color: white; padding: 5px; transform: rotate(5deg);"> <p>Not a member? Please sign up to gain complete access.</p> <p style="background-color: white; color: red; border-radius: 10px; padding: 2px 5px; display: inline-block;">Sign up</p> </div> </div> <p style="color: blue; font-size: small;">www.mathworksheets4kids.com</p> </div>	_____ ¢
3)		_____ ¢
4)		_____ ¢
5) 7 dimes = _____		_____ ¢




_____ ¢

_____ ¢

8) If a turtle toy costs 20¢, how many dimes do you need to buy it?

_____ dimes



Name : _____

Answer key

Score : _____


Counting Dimes

Sheet 3



Count the dimes and write the total amount.

1)		<u>30</u> ¢
2)	<div style="border: 2px solid blue; padding: 10px; text-align: center;"> <h1>PREVIEW</h1> <p>Access the largest collection of worksheets for just \$19.95 per year!</p> <div style="display: flex; justify-content: space-around;"> <div style="background-color: #007bff; color: white; padding: 5px; transform: rotate(-5deg);"> <p>Members, please log in to download this worksheet.</p> <p>Log in</p> </div> <div style="background-color: #007bff; color: white; padding: 5px; transform: rotate(5deg);"> <p>Not a member? Please sign up to gain complete access.</p> <p>Sign up</p> </div> </div> <p>www.mathworksheets4kids.com</p> </div>	<u>50</u> ¢
3)		<u>80</u> ¢
4)		<u>40</u> ¢
5) 7 dimes = <u>70</u>		mes = <u>90</u> ¢



ch money will you pay?

60 ¢

8) If a turtle toy costs 20¢, how many dimes do you need to buy it?

2 dimes

