

Name : \_\_\_\_\_

# Buying with Notes and Coins

Buy each item using as few notes and coins as possible.

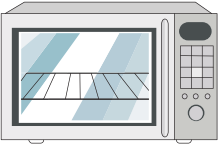



1)

					
<b>\$98.90</b>					



2)

					
<b>\$60.75</b>					

3)

				
<b>\$285.10</b>				

4)

				
<b>\$49.80</b>				

5)

					
<b>\$83.00</b>					

**PREVIEW**

Gain complete access to the largest collection of worksheets in all subjects!

Members, please log in to download this worksheet.

Not a member? Please sign up to gain complete access.

[www.mathworksheets4kids.com](http://www.mathworksheets4kids.com)