
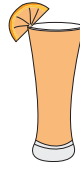


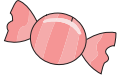







Making Change

Calculate the change for each set of items you buy.

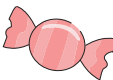

					
\$4.24	\$5.71	\$3.00	\$7.34	\$0.60	\$6.80

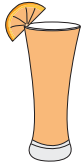

1) 2  + 3 

2) 6  + 5 

3) 1  + 3 

4) 9  + 4 

5) 8  + 7 

6) 6  + 1 

PREVIEW

Gain complete access to the largest collection of worksheets in all subjects!

Members, please log in to download this worksheet.

Not a member? Please sign up to gain complete access.

www.mathworksheets4kids.com