

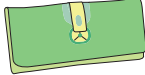



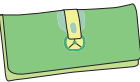





Making Change

Calculate the change for each set of items you buy.

					
\$18.75	\$6.96	\$6.50	\$4.33	\$7.92	\$17.25

1) 4  + 6 

2) 1  + 8 

3) 3  + 4 

4) 2  + 2 

5) 7  + 5 

6) 5  + 3 



PREVIEW

Gain complete access to the largest collection of worksheets in all subjects!

Members, please log in to download this worksheet.

Not a member? Please sign up to gain complete access.

www.mathworksheets4kids.com