

Name : _____

Money Conversion

A) Convert cents to dollars.

1) 580c = _____



2) 65c = _____

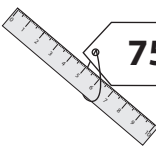
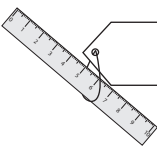
3) 445c = _____

4) 210c = _____

5) 80c = _____

6) 95c = _____

7)  **800c** =  _____

8)  **75c** =  _____

9) Cole bought a pack of party horns worth 500 cents. How many dollars did he pay to buy the pack?

B) Convert dollars to cents.

1) \$6.05 = _____



2) \$0.05 = _____


3) \$0.30 = _____

4) \$4.00 = _____

5) \$8.65 = _____

6) \$0.10 = _____

7)  **\$0.25** =  _____

8)  **\$7.90** =  _____

9) Emma has \$4.25 in her piggy bank. How many cents does Emma have in her piggy bank?

Name : _____

Money Conversion

A) Convert cents to dollars.

1) 580c = **\$5.80**



2) 65c = **\$0.65**


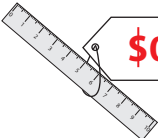
3) 445c = **\$4.45**

4) 210c = **\$2.10**

5) 80c = **\$0.80**

6) 95c = **\$0.95**

7)  **800c** =  **\$8.00**

8)  **75c** =  **\$0.75**

9) Cole bought a pack of party horns worth 500 cents. How many dollars did he pay to buy the pack?

 5.00 dollars

B) Convert dollars to cents.

1) \$6.05 = **605c**



2) \$0.05 = **5c**



3) \$0.30 = **30c**

4) \$4.00 = **400c**

5) \$8.65 = **865c**

6) \$0.10 = **10c**

7)  **\$0.25** =  **25c**

8)  **\$7.90** =  **790c**

9) Emma has \$4.25 in her piggy bank. How many cents does Emma have in her piggy bank?

 425 cents