


**Let's Go Shopping!**

**SPORTING GOODS STORE**


\$26.70




\$12.50



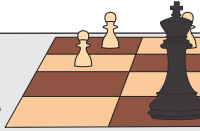
\$9.85



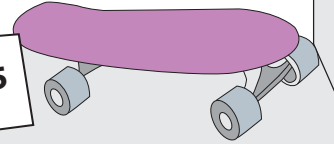
\$17.50



\$27.35



85



**PREVIEW**

Gain complete access to the largest collection of worksheets in all subjects!

Members, please log in to download this worksheet.

Not a member? Please sign up to gain complete access.

[www.mathworksheets4kids.com](http://www.mathworksheets4kids.com)

**\$45.00**

\_\_\_\_\_

\_\_\_\_\_

**\$10.00**

\_\_\_\_\_

\_\_\_\_\_

**\$20.00**

\_\_\_\_\_

\_\_\_\_\_

**\$40.00**

\_\_\_\_\_

\_\_\_\_\_

**\$50.00**

\_\_\_\_\_

\_\_\_\_\_

1) Nancy buys a skateboard. She pays the cashier \$45.00.  
What is the price of the skateboard?  
How much change did she receive?

2) Richard buys a skipping rope. He pays the cashier \$10.00.  
What is the price of the skipping rope?  
How much change did he receive?

3) Ethan buys a soccer ball. He pays the cashier \$20.00.  
What is the price of the soccer ball?  
How much change did he receive?

4) Amelia buys a baseball bat. She pays the cashier \$40.00.  
What is the price of the baseball bat?  
How much change did she receive?

5) Michael buys a volleyball. He pays the cashier \$50.00.  
What is the price of the volleyball?  
How much change did he receive?