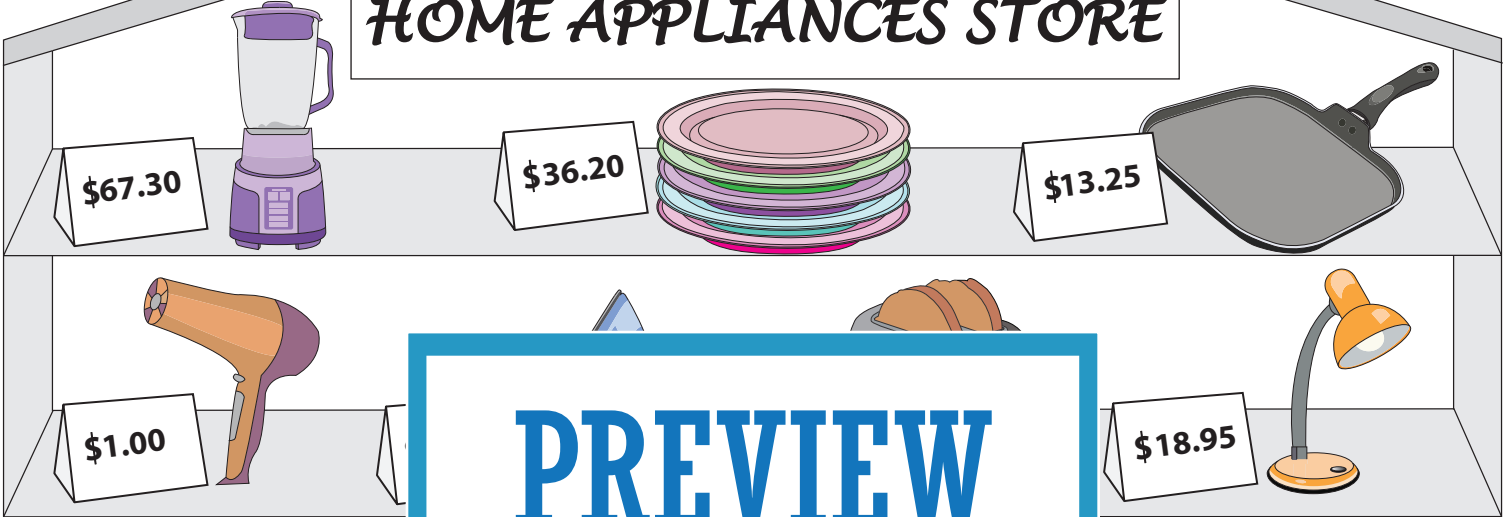


Let's Go Shopping!

HOME APPLIANCES STORE



PREVIEW

Gain complete access to the largest collection of worksheets in all subjects!

Members, please log in to download this worksheet.

Not a member? Please sign up to gain complete access.

www.mathworksheets4kids.com

- | | | |
|----|--|---|
| 1) | Thomas buys an iron. What is the price of the iron? How much change did he receive? | <p>\$40.00</p> <p>_____</p> <p>_____</p> |
| 2) | Jessica buys a fry pan. What is the price of the fry pan? How much change did she receive? | <p>\$15.00</p> <p>_____</p> <p>_____</p> |
| 3) | Mark buys a mixer grill. What is the price of the mixer grill? How much change did he receive? | <p>\$70.00</p> <p>_____</p> <p>_____</p> |
| 4) | Amy buys a study lamp. She pays the cashier \$20.00. What is the price of the study lamp? How much change did she receive? | <p>\$20.00</p> <p>_____</p> <p>_____</p> |
| 5) | Jessica buys a toaster. She pays the cashier \$30.00. What is the price of the toaster? How much change did she receive? | <p>\$30.00</p> <p>_____</p> <p>_____</p> |

Name : _____

Let's Go Shopping!

HOME APPLIANCES STORE





\$67.30


\$36.20



\$13.25



\$1.00



\$18.95

PREVIEW

Gain complete access to the largest collection of worksheets in all subjects!

Members, please log in to download this worksheet.

Not a member? Please sign up to gain complete access.

www.mathworksheets4kids.com

1) Thomas buys an iron.
What is the price of the iron?
How much change did he receive?

\$40.00

\$21.45

\$18.55

2) Jessica buys a fry pan.
What is the price of the fry pan?
How much change did she receive?

\$15.00

\$13.25

\$1.75

3) Mark buys a mixer grill.
What is the price of the mixer grill?
How much change did he receive?

\$70.00

\$67.30

\$2.70

4) Amy buys a study lamp. She pays the cashier \$20.00.
What is the price of the study lamp?
How much change did she receive?

\$20.00

\$18.95

\$1.05

5) Jessica buys a toaster. She pays the cashier \$30.00.
What is the price of the toaster?
How much change did she receive?

\$30.00

\$25.80

\$4.20