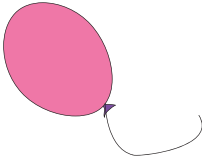




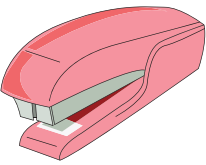


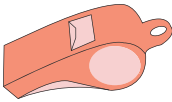

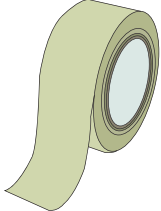



# Making Change

Count the coins and write the change for each purchase.

1)	 <p>20c</p>		<p>_____ c</p>
2)	 <p>65c</p>		<p>_____ c</p>
3)	 <p>1</p>		<p>_____ c</p>
4)	 <p>9</p>		<p>_____ c</p>
5)	 <p>7</p>		<p>_____ c</p>
6)	 <p>15c</p>		<p>_____ c</p>
7)	 <p>25c</p>		<p>_____ c</p>

**PREVIEW**

Gain complete access to the largest collection of worksheets in all subjects!

Members, please log in to download this worksheet.

Not a member? Please sign up to gain complete access.

[www.mathworksheets4kids.com](http://www.mathworksheets4kids.com)