












Making Change

Count the coins and write the change for each purchase.

1)	 <p>95c</p>		<p>_____ c</p>
2)	 <p>20c</p>		<p>_____ c</p>
3)	 <p>60c</p>		<p>_____ c</p>
4)	 <p>70c</p>		<p>_____ c</p>
5)	 <p>60c</p>		<p>_____ c</p>
6)	 <p>15c</p>		<p>_____ c</p>
7)	 <p>70c</p>		<p>_____ c</p>

PREVIEW

Gain complete access to the largest collection of worksheets in all subjects!

Members, please log in to download this worksheet.

Not a member? Please sign up to gain complete access.

www.mathworksheets4kids.com