



Name : _____

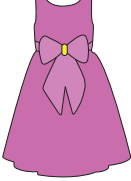
It's Time for Change


Sheet 1

1) You bought  for \$21.15.

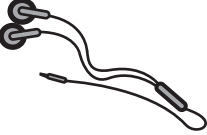
You paid  .

You got back... _____

2) You bought  for \$32.10.

You paid  .

You got back... _____

3) You bought  for \$3.85.

You paid _____ .

You got _____

PREVIEW


Gain complete access to the largest collection of worksheets in all subjects!

Members, please log in to download this worksheet.


Not a member? Please sign up to gain complete access.

www.mathworksheets4kids.com

4) You bought _____ for _____.

You paid  .


You got back... _____

5) You bought  for \$12.00.

You paid _____ .

You got _____

6) You bought _____ for _____.

You paid  .

You got back... _____

7) Mrs. Williams bought a carton of eggs priced at \$2.89. She handed a ten-dollar note to the cashier. How much change would the cashier return?

8) Mr. Smith bought a stainless steel flask worth \$10.95 at a department store. How much change did he receive, if Mr. Smith handed a twenty-dollar note to the cashier?
