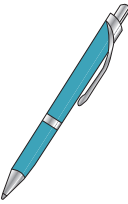



Name : _____


It's Time for Change


Sheet 2

1) You bought  for \$14.95.


You paid  .

You got back... _____

2) You bought  for \$43.00.

You paid  .

You got back... _____

3) You bought  for \$22.60.

You paid _____ .

You got back... _____

PREVIEW


Gain complete access to the largest collection of worksheets in all subjects!

Members, please log in to download this worksheet.

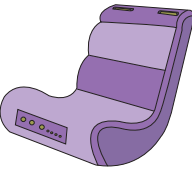
Not a member? Please sign up to gain complete access.

www.mathworksheets4kids.com

4) You bought _____ for _____.

You paid  .


You got back... _____

5) You bought  for \$99.90.

You paid _____ .

You got back... _____

6) You bought _____ for _____.

You paid  .

You got back... _____

7) Kevin buys an alarm clock at the mall. The price of the alarm clock is \$10.75. How much change does he receive, if Kevin pays for the clock with a twenty-dollar note?

8) Juan has saved up \$50.00. If he buys a bicycle for \$49.00, how much money is left with Juan?
