



Name : _____


It's Time for Change

1) You bought  for \$27.00.

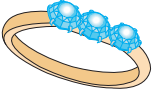
You paid  .

You got back... _____

2) You bought  for \$8.65.

You paid  .

You got back... _____

3) You bought  for \$16.30.

You paid _____ .

You got _____

PREVIEW


Gain complete access to the largest collection of worksheets in all subjects!

Members, please log in to download this worksheet.


Not a member? Please sign up to gain complete access.

www.mathworksheets4kids.com

4) You bought _____ for _____.

You paid  .


You got back... _____

5) You bought  for \$38.05.

You paid _____ .

You got _____

6) You bought _____ for _____.

You paid  .

You got back... _____

7) Rhea bought a cricket bat worth \$11.75 and paid with a hundred dollar note. How much change did Rhea receive?

8) Scarlett bought a pack of crayons for \$4.50 at the supplies store. How much change did she get, if she handed a five-dollar note to the storekeeper?
