




Name : \_\_\_\_\_


# It's Time for Change

1) You bought  for \$40.20.

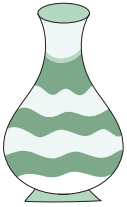
You paid  .

You got back \_\_\_\_\_.

2) You bought  for \$9.30.

You paid  .

You got back \_\_\_\_\_.

3) You bought  for \$15.75.

You paid \_\_\_\_\_.

You got back \_\_\_\_\_.


## PREVIEW

Gain complete access to the largest collection of worksheets in all subjects!

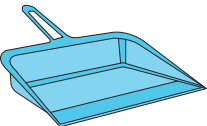
Members, please log in to download this worksheet.

Not a member? Please sign up to gain complete access.

[www.mathworksheets4kids.com](http://www.mathworksheets4kids.com)


4) You paid  .

You got back \_\_\_\_\_.

5) You bought  for \$22.50.

You paid \_\_\_\_\_.

You got back \_\_\_\_\_.

6) You paid  .

You got back \_\_\_\_\_.

7) Mrs. Williams picked an egg carton priced at \$7.99. She handed a five dollar bill to the cashier. How much change would the cashier return?

\_\_\_\_\_

8) The Smiths were at the home appliance store, Mr. Smith bought a microwave oven worth \$85.90. He paid a hundred-dollar bill at the checkout counter. How much change did he receive?

\_\_\_\_\_

Name : \_\_\_\_\_

**It's Time for Change**

1) You bought  for \$40.20.

You paid  .

You got back \_\_\_\_\_.

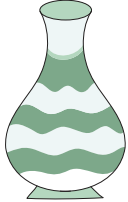
**\$9.80**

2) You bought  for \$9.30.

You paid  .

You got back \_\_\_\_\_.

**\$0.70**

3) You bought  for \$15.75.

You paid \_\_\_\_\_.

You got back \_\_\_\_\_.


**PREVIEW**

Gain complete access to the largest collection of worksheets in all subjects!

Members, please log in to download this worksheet.

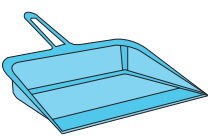
Not a member? Please sign up to gain complete access.

[www.mathworksheets4kids.com](http://www.mathworksheets4kids.com)

4) You paid  .


You got back \_\_\_\_\_.

**\$0.65**

5) You bought  for \$22.50.

You paid \_\_\_\_\_.

You got back \_\_\_\_\_.

6) You paid  .

You got back \_\_\_\_\_.

**\$28.05**

7) Mrs. Williams picked an egg carton priced at \$7.65. She handed a five dollar bill to the cashier. How much change would the cashier return?

**\$0.35**

8) The Smiths were at the home appliance store, Mr. Smith bought a microwave oven worth \$85.90. He paid a hundred-dollar bill at the checkout counter. How much change did he receive?

**\$14.10**