



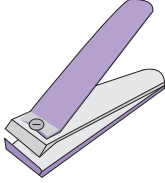
Name : \_\_\_\_\_


# It's Time for Change

1) You bought  for \$31.65.


You paid  .

You got back \_\_\_\_\_ .

2) You bought  for \$4.00.

You paid  .

You got back \_\_\_\_\_ .

3) You bought  for \$36.90.

You paid \_\_\_\_\_ .

You got back \_\_\_\_\_ .

## PREVIEW


Gain complete access to the largest collection of worksheets in all subjects!

Members, please log in to download this worksheet.


Not a member? Please sign up to gain complete access.

[www.mathworksheets4kids.com](http://www.mathworksheets4kids.com)

4) You bought \_\_\_\_\_ for \$10.00.

You paid  .


You got back \_\_\_\_\_ .

5) You bought  for \$18.25.

You paid \_\_\_\_\_ .

You got back \_\_\_\_\_ .

6) You bought \_\_\_\_\_ for \$10.00.

You paid  .

You got back \_\_\_\_\_ .

7) Rhea bought a hat worth \$9.50 and paid with a ten-dollar bill. How much change did Rhea receive?


\_\_\_\_\_


8) Scarlett went to a store to buy a pack of crayons. The pack cost \$3.55 and she handed a five-dollar bill to the storekeeper. How much did Scarlett get?

\_\_\_\_\_

Name : \_\_\_\_\_

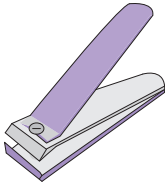
**It's Time for Change**


1) You bought  for \$31.65.

You paid  .

You got back \_\_\_\_\_.


**\$18.35**

2) You bought  for \$4.00.

You paid  .

You got back \_\_\_\_\_.

**\$1.00**

3) You bought  for \$36.90.

You paid \_\_\_\_\_.

You got back \_\_\_\_\_.


**PREVIEW**

Gain complete access to the largest collection of worksheets in all subjects!

Members, please log in to download this worksheet.


Not a member? Please sign up to gain complete access.

[www.mathworksheets4kids.com](http://www.mathworksheets4kids.com)

You paid  .


You got back \_\_\_\_\_.

**\$2.55**

5) You bought  for \$18.25.

You paid \_\_\_\_\_.

You got back \_\_\_\_\_.

You paid  .

You got back \_\_\_\_\_.

**\$2.70**

7) Rhea bought a hat worth \$9.90 and paid with a ten dollar bill. How much change did Rhea receive?

**\$0.10**

8) Scarlett went to a store to buy a pack of crayons. The pack cost \$3.55 and she handed a five-dollar bill to the storekeeper. How much did Scarlett get?

**\$1.45**