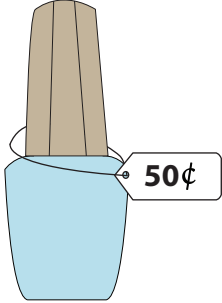


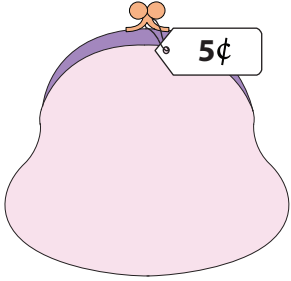
## What is Your Change?

You pay \$1 for each item. Show the change you receive, with minimum number of coins.

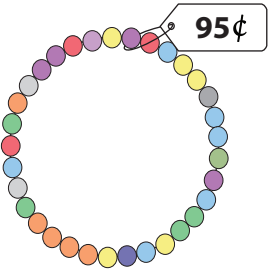
1)

	<p>_____ quarters</p> <p>_____ dimes</p> <p>_____ nickels</p>
---	---


2)

	<p>_____ quarters</p> <p>_____ dimes</p> <p>_____ nickels</p>
--	---

3)

	<p>_____ quarters</p> <p>_____ dimes</p> <p>_____ nickels</p>
--	---

5)

	<p>_____ quarters</p> <p>_____ dimes</p> <p>_____ nickels</p>
---	---

# PREVIEW

Gain complete access to the largest collection of worksheets in all subjects!

Members, please log in to download this worksheet.

Not a member? Please sign up to gain complete access.

[www.mathworksheets4kids.com](http://www.mathworksheets4kids.com)

7) You pay with \$1 for an eraser that costs 40¢. Write your change in minimum number of coins.

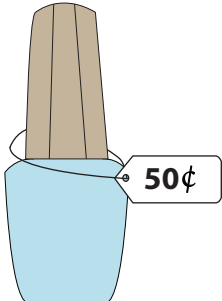
\_\_\_\_\_ quarters ; \_\_\_\_\_ dimes ; \_\_\_\_\_ nickels

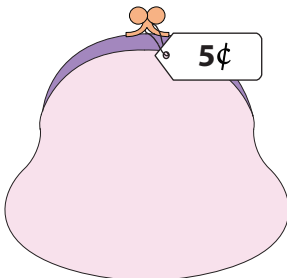
8) You pay with \$1 for a spoon that costs 10¢. Write your change in minimum number of coins.

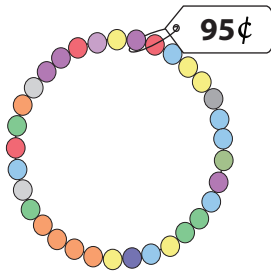
\_\_\_\_\_ dimes ; \_\_\_\_\_ nickels ; \_\_\_\_\_ quarters


## What is Your Change?

You pay \$1 for each item. Show the change you receive, with minimum number of coins.

1)  2 quarters  
0 dimes  
0 nickels

2)  3 quarters  
2 dimes  
0 nickels

3)  2 quarters  
0 dimes  
1 nickels

5)  1 quarters  
1 dimes  
0 nickels

# PREVIEW

Gain complete access to the largest collection of worksheets in all subjects!

Members, please log in to download this worksheet.

Not a member? Please sign up to gain complete access.

[www.mathworksheets4kids.com](http://www.mathworksheets4kids.com)

7) You pay with \$1 for an eraser that costs 40¢. Write your change in minimum number of coins.

2 quarters ; 1 dimes ; 0 nickels

8) You pay with \$1 for a spoon that costs 10¢. Write your change in minimum number of coins.

9 dimes ; 0 nickels ; 0 quarters