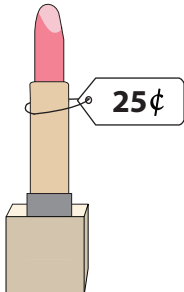



What is Your Change?

You pay \$1 for each item. Show the change you receive, with minimum number of coins.


1)

	<p>_____ quarters</p> <p>_____ dimes</p> <p>_____ nickels</p>
---	---

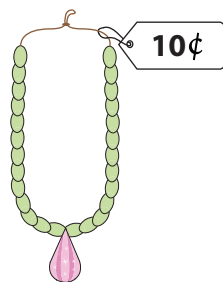
2)

	<p>_____ quarters</p> <p>_____ dimes</p> <p>_____ nickels</p>
--	---

3)

	<p>_____ quarters</p> <p>_____ dimes</p> <p>_____ nickels</p>
--	---

5)

	<p>_____ quarters</p> <p>_____ dimes</p> <p>_____ nickels</p>
---	---

PREVIEW

Gain complete access to the largest collection of worksheets in all subjects!

Members, please log in to download this worksheet.

Not a member? Please sign up to gain complete access.

www.mathworksheets4kids.com

7) You pay with \$1 for a coin purse that costs 15¢. Write your change in minimum number of coins.

_____ nickels ; _____ quarters; _____ dimes

8) You pay with \$1 for a hair band that costs 30¢. Write your change in minimum number of coins.

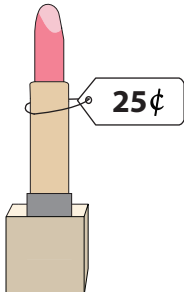
_____ quarters ; _____ dimes ; _____ nickels

Name : _____


What is Your Change?

You pay \$1 for each item. Show the change you receive, with minimum number of coins.


1)

	<u> 3 </u> quarters
	<u> 0 </u> dimes
	<u> 0 </u> nickels

2)

	<u> 0 </u> quarters
	<u> 0 </u> dimes
	<u> 1 </u> nickels

3)

	<u> 1 </u> quarters
	<u> 0 </u> dimes
	<u> 1 </u> nickels

PREVIEW


Gain complete access to the largest collection of worksheets in all subjects!

Members, please log in to download this worksheet.

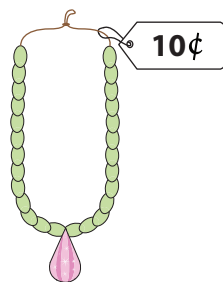
Not a member? Please sign up to gain complete access.

www.mathworksheets4kids.com


4)

	<u> 1 </u> quarters
	<u> 0 </u> dimes
	<u> 1 </u> nickels

5)

	<u> 0 </u> quarters
	<u> 2 </u> dimes
	<u> 0 </u> nickels

6)

	<u> 0 </u> quarters
	<u> 2 </u> dimes
	<u> 0 </u> nickels

7) You pay with \$1 for a coin purse that costs 15¢. Write your change in minimum number of coins.

 17 nickels ; 0 quarters; 0 dimes

8) You pay with \$1 for a hair band that costs 30¢. Write your change in minimum number of coins.

 2 quarters ; 2 dimes ; 0 nickels