

Money Conversion

A) Convert cents to dollars.

1) 580¢ = _____

2) 65¢ = _____

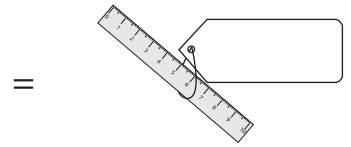
3) 445¢ = _____

4) 210¢ = _____

5) 80¢ = _____

6) 95¢ = _____

7)  905¢ = _____



9) Cole bought a pack of _____ the pack?

_____ dollars did he pay to buy

PREVIEW

Gain complete access to the largest collection of worksheets in all subjects!

Members, please log in to download this worksheet.

Not a member? Please sign up to gain complete access.



www.mathworksheets4kids.com



B) Convert dollars to cents

1) \$6.05 = _____

3) \$0.30 = _____

5) \$8.65 = _____

7)  \$0.55 =  _____

8)  \$7.70 =  _____

9) Emma has \$ 4.25 in her piggy bank. How many cents does Emma have in her piggy bank?

Name : _____

Money Conversion

A) Convert cents to dollars.

1) 580¢ = \$5.80

2) 65¢ = \$0.65

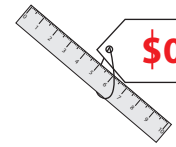
3) 445¢ = \$4.45

4) 210¢ = \$2.10

5) 80¢ = \$0.80

6) 95¢ = \$0.95

7)  **905¢** = _____

_____ =  **\$0.60**

9) Cole bought a pack of _____ the pack?
5.00 dollars

_____ dollars did he pay to buy

PREVIEW

Gain complete access to the largest collection of worksheets in all subjects!

Members, please log in to download this worksheet.

Not a member? Please sign up to gain complete access.

www.mathworksheets4kids.com

B) Convert dollars to cents

1) \$6.05 = _____

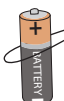
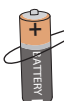
_____ **5¢**



3) \$0.30 = _____

_____ **400¢**

5) \$8.65 = _____

_____ **10¢**

7)  **\$0.55** =  **55¢**

8)  **\$7.70** =  **770¢**

9) Emma has \$4.25 in her piggy bank. How many cents does Emma have in her piggy bank?
425 cents