

Name : _____

Money Conversion

A) Convert cents to dollars.

1) 175¢ = _____

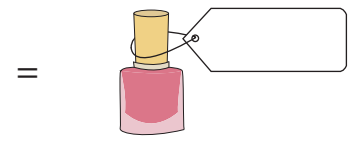

2) 800¢ = _____

3) 50¢ = _____

4) 605¢ = _____

5) 5¢ = _____

6) 40¢ = _____



9) Richard has 190 cents.

_____ in his collection?

PREVIEW

Gain complete access to the largest collection of worksheets in all subjects!

Members, please log in to download this worksheet.

Not a member? Please sign up to gain complete access.


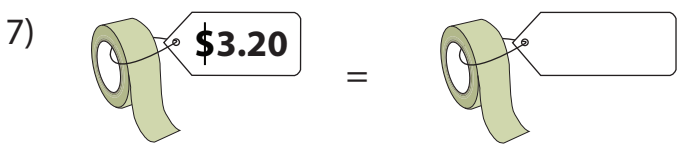
www.mathworksheets4kids.com

B) Convert dollars to cents

1) \$0.20 = _____

3) \$0.15 = _____

5) \$2.90 = _____



9) Natalie gifted a board game worth \$8.95 to her little sister Jess. How many cents has Natalie spent to buy the gift?

Name : _____

Money Conversion

A) Convert cents to dollars.

1) 175¢ = \$1.75

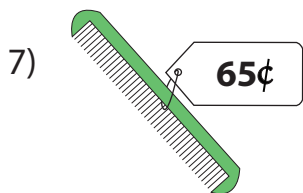
2) 800¢ = \$8.00

3) 50¢ = \$0.50

4) 605¢ = \$6.05

5) 5¢ = \$0.05

6) 40¢ = \$0.40



9) Richard has 190 cents.
1.90 dollars

How many dollars does he have in his collection?

PREVIEW

Gain complete access to the largest collection of worksheets in all subjects!

Members, please log in to download this worksheet.

Not a member? Please sign up to gain complete access.

www.mathworksheets4kids.com

B) Convert dollars to cents.

1) \$0.20 = 20¢

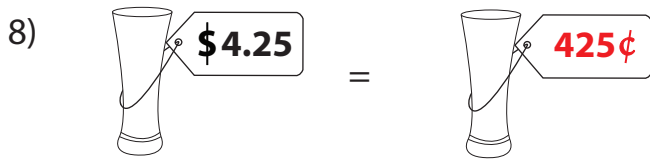
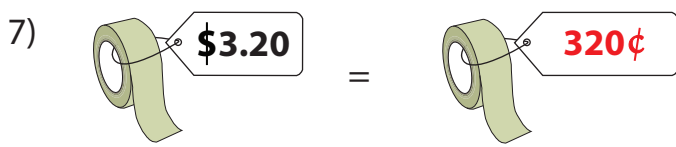
900¢

3) \$0.15 = 15¢

45¢

5) \$2.90 = 290¢

165¢



9) Natalie gifted a board game worth \$8.95 to her little sister Jess. How many cents has Natalie spent to buy the gift?

895 cents