
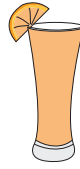


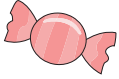



# Making Change

Calculate the change for each set of items you buy.

					
\$1.24	\$2.70	\$3.00	\$3.34	\$0.02	\$4.29

- 1)  6 +  4 \_\_\_\_\_
- 2)  13 + 15 \_\_\_\_\_
- 3)  5 + 16 \_\_\_\_\_
- 4)  5 + 8 \_\_\_\_\_
- 5)  7 +  4 \_\_\_\_\_
- 6)  14 +  5 \_\_\_\_\_

## PREVIEW

Gain complete access to the largest collection of worksheets in all subjects!

Members, please log in to download this worksheet.

Not a member? Please sign up to gain complete access.

[www.mathworksheets4kids.com](http://www.mathworksheets4kids.com)