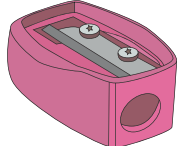





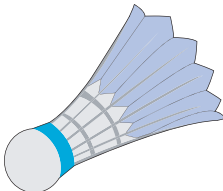

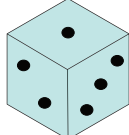



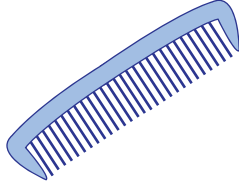



Name : _____

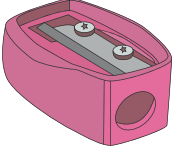



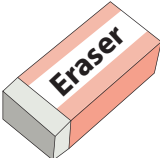

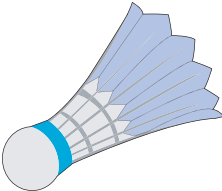

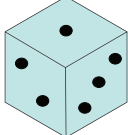



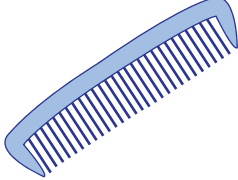

Making Change

Count the coins and write the change for each purchase.

1)	 15¢		_____ ¢
2)	 35¢		_____ ¢
3)	 65¢		_____ ¢
4)	 40¢		_____ ¢
5)	 15¢		_____ ¢
6)	 45¢		_____ ¢
7)	 20¢		_____ ¢

Making Change

Count the coins and write the change for each purchase.

1)	 <p>15¢</p>		<p><u> 5 </u> ¢</p>
2)	 <p>35¢</p>		<p><u> 15 </u> ¢</p>
3)	 <p>65¢</p>		<p><u> 10 </u> ¢</p>
4)	 <p>40¢</p>		<p><u> 10 </u> ¢</p>
5)	 <p>15¢</p>		<p><u> 5 </u> ¢</p>
6)	 <p>45¢</p>		<p><u> 5 </u> ¢</p>
7)	 <p>20¢</p>		<p><u> 5 </u> ¢</p>