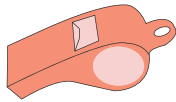



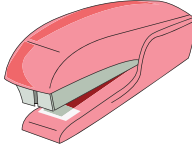



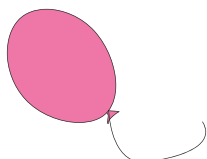





Making Change

Count the coins and write the change for each purchase.

1)	 <p>25¢</p>		<p>_____ ¢</p>
2)	 <p>70¢</p>		<p>_____ ¢</p>
3)	 <p>30¢</p>		<p>_____ ¢</p>
4)	 <p>10¢</p>		<p>_____ ¢</p>
5)	 <p>60¢</p>		<p>_____ ¢</p>
6)	 <p>20¢</p>		<p>_____ ¢</p>
7)	 <p>45¢</p>		<p>_____ ¢</p>

PREVIEW

Gain complete access to the largest collection of worksheets in all subjects!

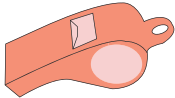



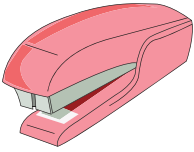







Members, please log in to download this worksheet.

Not a member? Please sign up to gain complete access.

www.mathworksheets4kids.com

Making Change

Count the coins and write the change for each purchase.

1)	 25¢		<u> 5 </u> ¢
2)	 70¢		<u> 5 </u> ¢
3)	 30¢		<u> 20 </u> ¢
4)			<u> 5 </u> ¢
5)	 60¢		<u> 15 </u> ¢
6)	 20¢		<u> 5 </u> ¢
7)	 45¢		<u> 5 </u> ¢

PREVIEW

Gain complete access to the largest collection of worksheets in all subjects!

Members, please log in to download this worksheet.

Not a member? Please sign up to gain complete access.

www.mathworksheets4kids.com