



Let's Go Shopping!

FOOD STORE

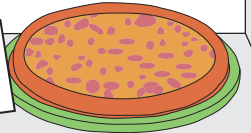
\$15.40




\$7.00




\$20.05



\$6.50



\$85.65



PREVIEW

Gain complete access to the largest collection of worksheets in all subjects!

Members, please log in to download this worksheet.

Not a member? Please sign up to gain complete access.

www.mathworksheets4kids.com

\$10.00

\$90.00

\$30.00

\$20.00

\$40.00

1) Robert buys a burger.
What is the price of the burger?
How much change did he receive?

2) John buys a cake. He pays the cashier \$100.
What is the price of the cake?
How much change did he receive?

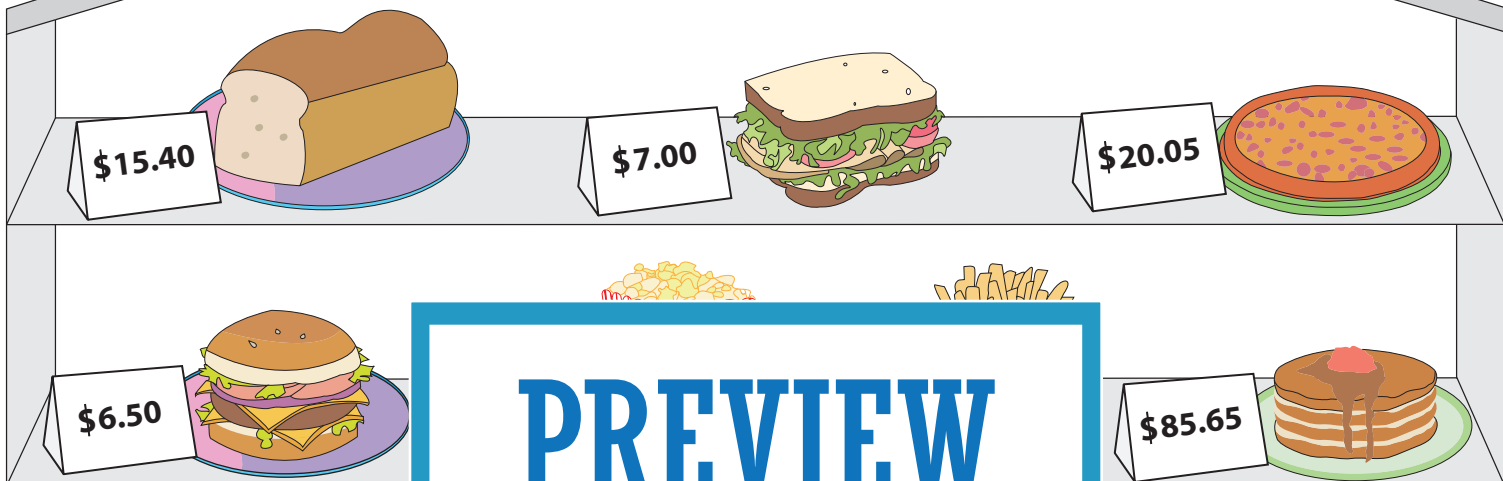
3) Maria buys a pizza. She pays the cashier \$50.
What is the price of the pizza?
How much change did she receive?

4) William buys a pack of french fries. He pays the cashier \$20.00.
What is the price of the french fries?
How much change did he receive?

5) Sophia buys a loaf of bread. She pays the cashier \$40.00.
What is the price of the bread?
How much change did she receive?

Let's Go Shopping!

FOOD STORE



PREVIEW

Gain complete access to the largest collection of worksheets in all subjects!

Members, please log in to download this worksheet.

Not a member? Please sign up to gain complete access.

www.mathworksheets4kids.com

1) Robert buys a burger. What is the price of the burger?
How much change did he receive?

\$10.00
 \$6.50
 \$3.50

2) John buys a cake. He pays the cashier \$90.00. What is the price of the cake?
How much change did he receive?

\$90.00
 \$85.65
 \$4.35

3) Maria buys a pizza. She pays the cashier \$30.00. What is the price of the pizza?
How much change did she receive?

\$30.00
 \$20.05
 \$9.95

4) William buys a pack of french fries. He pays the cashier \$20.00. What is the price of the french fries?
How much change did he receive?

\$20.00
 \$5.15
 \$14.85

5) Sophia buys a loaf of bread. She pays the cashier \$40.00. What is the price of the bread?
How much change did she receive?

\$40.00
 \$15.40
 \$24.60