

Let's Go Shopping!

SPORTING GOODS STORE

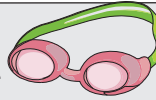
\$31.50




\$16.75



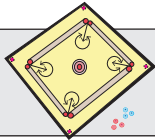
\$13.75



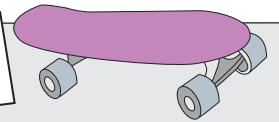
\$22.25



\$29.40



4.35



PREVIEW

Gain complete access to the largest collection of worksheets in all subjects!

Members, please log in to download this worksheet.

Not a member? Please sign up to gain complete access.

www.mathworksheets4kids.com

1) Susan buys a skateboard. She pays the cashier \$70.00.
What is the price of the skateboard?
How much change did she receive?

\$70.00

2) Ethan buys a swimming cap. He pays the cashier \$20.00.
What is the price of the swimming cap?
How much change did he receive?

\$20.00

3) Richard buys a soccer ball. He pays the cashier \$50.00.
What is the price of the soccer ball?
How much change did he receive?

\$50.00

4) Nancy buys a baseball bat. She pays the cashier \$50.00.
What is the price of the baseball bat?
How much change did she receive?

\$50.00

5) Michael buys a basketball. He pays the cashier \$40.00.
What is the price of the basketball?
How much change did he receive?


\$40.00

Name : _____

Let's Go Shopping!

SPORTING GOODS STORE

\$31.50




\$16.75



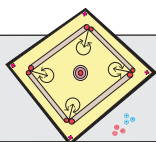
\$13.75



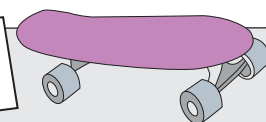
\$22.25



\$29.40



\$4.35



PREVIEW

Gain complete access to the largest collection of worksheets in all subjects!

Members, please log in to download this worksheet.

Not a member? Please sign up to gain complete access.

www.mathworksheets4kids.com

1) Susan buys a skateboard. She pays the cashier \$70.00.
What is the price of the skateboard?
How much change did she receive?

\$70.00

\$64.35

\$5.65

2) Ethan buys a swimming cap. He pays the cashier \$20.00.
What is the price of the swimming cap?
How much change did he receive?

\$20.00

\$13.75

\$6.25

3) Richard buys a soccer ball. He pays the cashier \$50.00.
What is the price of the soccer ball?
How much change did he receive?

\$50.00

\$16.75

\$33.25

4) Nancy buys a baseball bat. She pays the cashier \$50.00.
What is the price of the baseball bat?
How much change did she receive?

\$50.00

\$45.00

\$5.00

5) Michael buys a basketball. He pays the cashier \$40.00.
What is the price of the basketball?
How much change did he receive?

\$40.00

\$22.25

\$17.75