


Let's Go Shopping!

HOME APPLIANCES STORE


\$52.50



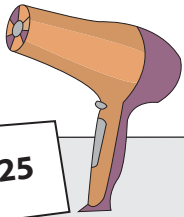
\$43.05



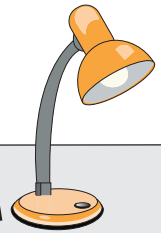
\$16.00



\$7.25



\$22.20



PREVIEW

Gain complete access to the largest collection of worksheets in all subjects!

Members, please log in to download this worksheet.

Not a member? Please sign up to gain complete access.

www.mathworksheets4kids.com

1) Rose buys an iron. She pays the cashier \$40.00.
What is the price of the iron?
How much change did she receive?

\$30.00

2) Mark buys a fry pan. He pays the cashier \$30.00.
What is the price of the fry pan?
How much change did he receive?

\$20.00

3) Thomas buys a mixer. He pays the cashier \$70.00.
What is the price of the mixer?
How much change did he receive?

\$60.00

4) Amy buys a study lamp. She pays the cashier \$40.00.
What is the price of the study lamp?
How much change did she receive?

\$40.00

5) Jessica buys a toaster. She pays the cashier \$50.00.
What is the price of the toaster?
How much change did she receive?

\$50.00


Name : _____

Let's Go Shopping!


HOME APPLIANCES STORE



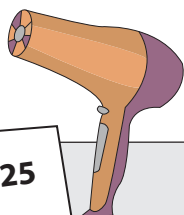
\$52.50




\$43.05



\$16.00



\$7.25



\$22.20

PREVIEW

Gain complete access to the largest collection of worksheets in all subjects!

Members, please log in to download this worksheet.

Not a member? Please sign up to gain complete access.

www.mathworksheets4kids.com

1) Rose buys an iron. She pays the cashier \$40.00.
What is the price of the iron?
How much change did she receive?

\$30.00

\$24.75

\$5.25

2) Mark buys a fry pan. He pays the cashier \$30.00.
What is the price of the fry pan?
How much change did he receive?

\$20.00

\$16.00

\$4.00

3) Thomas buys a mixer. He pays the cashier \$60.00.
What is the price of the mixer?
How much change did he receive?

\$60.00

\$52.50

\$7.50

4) Amy buys a study lamp. She pays the cashier \$40.00.
What is the price of the study lamp?
How much change did she receive?

\$40.00

\$22.20

\$17.80

5) Jessica buys a toaster. She pays the cashier \$50.00.
What is the price of the toaster?
How much change did she receive?

\$50.00

\$30.45

\$19.55