
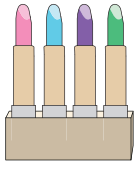
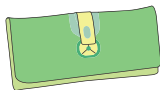





Name : \_\_\_\_\_

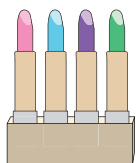
# Making Change

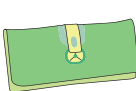
Calculate the change for each set of items you buy.

					
£12.40	£10.22	£5.73	£13.52	£2.50	£7.80



1)  5 + 12

2)  13 + 6

3)  3 + 14

4)  15 + 16

5)  11 + 10

6)  4 + 2 

**PREVIEW**

Gain complete access to the largest collection of worksheets in all subjects!

Members, please log in to download this worksheet.

Not a member? Please sign up to gain complete access.

[www.mathworksheets4kids.com](http://www.mathworksheets4kids.com)