

Name : _____

Money Conversion

A) Convert pence to pounds.

1) 109p = _____

2) 845p = _____

3) 28p = _____

4) 663p = _____

5) 462p = _____

6) 159p = _____

7)  **897p** = _____

= _____ 

9) Cole bought a pack of _____
the pack?

_____ pounds did he pay to buy

PREVIEW

Gain complete access to the largest collection of worksheets in all subjects!

Members, please log in to download this worksheet.

Not a member? Please sign up to gain complete access.



www.mathworksheets4kids.com

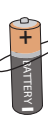

B) Convert pounds to pence

1) £7.45 = _____

3) £1.13 = _____

5) £5.90 = _____

7)  **£7.59** =  _____

8)  **£0.63** =  _____

9) Emma has £4.25 in her piggy bank. How many pence does Emma have in her piggy bank?

Name : _____

Money Conversion

A) Convert pence to pounds.

1) 109p = £1.09

2) 845p = £8.45

3) 28p = £0.28

4) 663p = £6.63

5) 462p = £4.62

6) 159p = £1.59

7)  **897p** =

=  **£1.28**

9) Cole bought a pack of _____
the pack?

_____ pounds did he pay to buy

5.00 pounds

PREVIEW

Gain complete access to the largest collection of worksheets in all subjects!

Members, please log in to download this worksheet.

Not a member? Please sign up to gain complete access.

www.mathworksheets4kids.com

B) Convert pounds to pence

1) £7.45 = 745p



489p

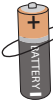
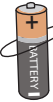
3) £1.13 = 113p

37p

5) £5.90 = 590p

300p

7)  **£7.59** =  **759p**

8)  **£0.63** =  **63p**

9) Emma has £4.25 in her piggy bank. How many pence does Emma have in her piggy bank?

425 pence