

Money Conversion

A) Convert pence to pounds.

1) 258p = _____

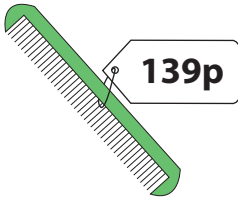
2) 86p = _____

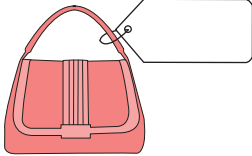
3) 812p = _____

4) 147p = _____

5) 400p = _____

6) 623p = _____

7)  = _____

= 

9) Richard has 199 pence. How many pounds is this?

_____ in his collection?

PREVIEW

Gain complete access to the largest collection of worksheets in all subjects!

Members, please log in to download this worksheet.

Not a member? Please sign up to gain complete access.



www.mathworksheets4kids.com

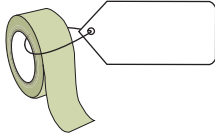
B) Convert pounds to pence

1) £0.48 = _____

3) £2.84 = _____

5) £5.10 = _____

7)  = 

8)  = 

9) Natalie gifted a board game worth £8.99 to her little sister Jess. How many pence has Natalie spent to buy the gift?

Name : _____

Money Conversion

A) Convert pence to pounds.

1) 258p = £2.58

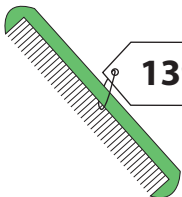
2) 86p = £0.86

3) 812p = £8.12

4) 147p = £1.47

5) 400p = £4.00

6) 623p = £6.23

7)  **139p** = _____

=  **£9.83**

9) Richard has 199 pence.
1.99 pounds

How many pounds is in his collection?

PREVIEW

Gain complete access to the largest collection of worksheets in all subjects!

Members, please log in to download this worksheet.

Not a member? Please sign up to gain complete access.

www.mathworksheets4kids.com

B) Convert pounds to pence

1) £0.48 = _____



725p

3) £2.84 = _____

693p

5) £5.10 = _____

15p

7)  **£3.52** =  **352p**

8)  **£1.99** =  **199p**

9) Natalie gifted a board game worth £8.99 to her little sister Jess. How many pence has Natalie spent to buy the gift?

899 pence