

Money Conversion

A) Convert pence to pounds.

1) 79p = _____

2) 672p = _____

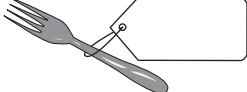
3) 210p = _____

4) 13p = _____

5) 834p = _____

6) 451p = _____

7)  = _____

= 

9) John bought a clay pot for _____

How much did he spend to get the pot?

PREVIEW

Gain complete access to the largest collection of worksheets in all subjects!

Members, please log in to download this worksheet.

Not a member? Please sign up to gain complete access.


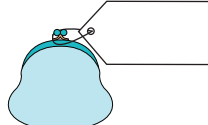
www.mathworksheets4kids.com


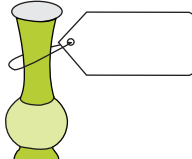
B) Convert pounds to pence.

1) £6.00 = _____

3) £5.89 = _____

5) £0.14 = _____

7)  = 

8)  = 

9) Julie buys vanilla wafers for £1.42. How many pence does she spend?

Name : _____

Money Conversion

A) Convert pence to pounds.

1) 79p = £0.79

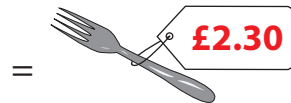
2) 672p = £6.72

3) 210p = £2.10

4) 13p = £0.13

5) 834p = £8.34

6) 451p = £4.51



9) John bought a clay pot for 9.00 pounds

How much does he spend to get the pot?

PREVIEW

Gain complete access to the largest collection of worksheets in all subjects!

Members, please log in to download this worksheet.

Not a member? Please sign up to gain complete access.

www.mathworksheets4kids.com

B) Convert pounds to pence

1) £6.00 = 36p


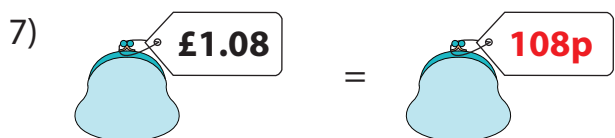
36p

3) £5.89 = 425p

425p

5) £0.14 = 967p

967p



9) Julie buys vanilla wafers for £1.42. How many pence does she spend?

142 pence