
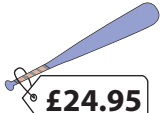
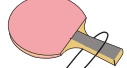





# Figure out the Change!

1) Rachel has  . She buys a  and a  . How much change does she get?




**£24.95**      **£14.97**

\_\_\_\_\_

2) Mary has  . She buys a  and a  . What is her change?





**£2.50**      **£1.10**

\_\_\_\_\_

3) Roy has  . He buys a  and a  . What is his change?


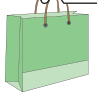


**£1.46**      **£7.99**

\_\_\_\_\_

4) Jack has  . He buys a  , a  and a  . How much change does he get?



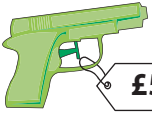
**£11.58**      **£8.95**      **£5.67**

\_\_\_\_\_

5) Eric has  . He buys a  , a  and a  . How much change does he get?

**£6.52**      **£24.14**      **£10.78**

\_\_\_\_\_

6) Ruth has  . She buys a  and a  . What is her change?

**£2.69**      **£5.84**

\_\_\_\_\_

7) Ascot went to a pet store and bought a dog bed for £36.99 and a collar for £6.72. If he handed a fifty-pound note to the cashier, how much money did Ascot receive in change?


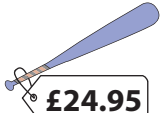
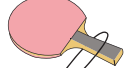
\_\_\_\_\_

8) Paul has £20.00 in his wallet. He buys a keyboard for £13.00 and a mouse for £6.69 at an electronics store. How much money is left with him?




\_\_\_\_\_

Name : \_\_\_\_\_




**Figure out the Change!**

1) Rachel has  . She buys a  and a  . How much change does she get?





**£10.08**

2) Mary has  . She buys a  and a  . What is her change?


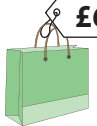


**£1.40**

3) Roy has  . He buys a  and a  . What is his change?



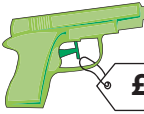
**£10.55**

4) Jack has  . He buys a  , a  and a  . How much change does he get?

**£23.80**

5) Eric has  . He buys a  , a  and a  . How much change does he get?

**£8.56**

6) Ruth has  . She buys a  and a  . What is her change?

**£1.47**

7) Ascot went to a pet store and bought a dog bed for £36.99 and a collar for £6.72. If he handed a fifty-pound note to the cashier, how much money did Ascot receive in change?

**£6.29**

8) Paul has £20.00 in his wallet. He buys a keyboard for £13.00 and a mouse for £6.69 at an electronics store. How much money is left with him?

**£0.31**