




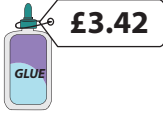



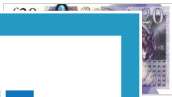







Figure out the Change!

1) Jerry has  . He buys a  **£10.30** and a  **£1.60** . What is his change?

2) Judy has  . She buys a  **£4.65** and a  **£3.42** . How much change does she get?

3) Peter has  . He buys a  **£19.87** and a  . How much change does he get?

4) Judy has  . She buys a  **£11.04** and a  . How much change does she get?

5) Rose has  . She buys a  **£5.40** and a  . What is her change?

6) Tom has  . He buys a  **£9.57** and a  **£7.45** . How much change does he get?

PREVIEW

Gain complete access to the largest collection of worksheets in all subjects!

Members, please log in to download this worksheet.

Not a member? Please sign up to gain complete access.




www.mathworksheets4kids.com

7) Mom bought a bunch of bananas priced at 21.42, a carton of milk costing 20.99 and an ice cream tub worth £2.24 to make a banana milkshake. She made the payment with a five-pound note. How much change did Mom receive?



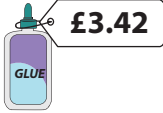
8) At the supplies store, Alex bought a ream of paper for £36.78, a pack of push pins for £1.25 and sticky notes for £4.97. He handed the cashier a fifty-pound note. How much change did he receive?

Name : _____




Figure out the Change!

1) Jerry has  . He buys a  **£10.30** and a  **£1.60** . What is his change?

£8.10

2) Judy has  . She buys a  **£4.65** and a  **£3.42** . How much change does she get?




£1.93

3) Peter has  . He buys a  **£19.87** and a  **£11.04** . How much change does he get?

£8.10

4) Judy has  . She buys a  **£4.65** and a  **£3.42** . How much change does she get?

£1.93

5) Rose has  . She buys a  **£5.40** and a  **£5.60** . What is her change?

£5.60

6) Mom bought a bunch of bananas priced at **£2.42**, a carton of milk costing **£0.95** and an ice cream tub worth **£2.24** to make a banana milkshake. She made the payment with a five-pound note. How much change did Mom receive?

£0.41

PREVIEW

Gain complete access to the largest collection of worksheets in all subjects!

Members, please log in to download this worksheet.

Not a member? Please sign up to gain complete access.

www.mathworksheets4kids.com

7) Mom bought a bunch of bananas priced at **£2.42**, a carton of milk costing **£0.95** and an ice cream tub worth **£2.24** to make a banana milkshake. She made the payment with a five-pound note. How much change did Mom receive?

£0.41

8) At the supplies store, Alex bought a ream of paper for **£36.78**, a pack of push pins for **£1.25** and sticky notes for **£4.97**. He handed the cashier a fifty-pound note. How much change did he receive?

£7.00