

**Let's Go Shopping!**

**SPORTING GOODS STORE**

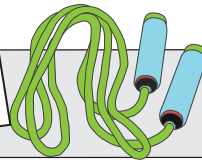
£14.85




£24.95



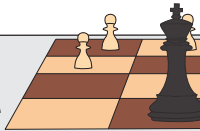
£15.69



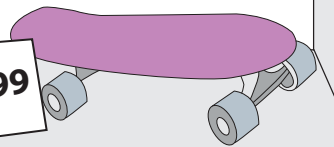
£40.45



£19.90



1.99



**PREVIEW**

Gain complete access to the largest collection of worksheets in all subjects!

Members, please log in to download this worksheet.

Not a member? Please sign up to gain complete access.

[www.mathworksheets4kids.com](http://www.mathworksheets4kids.com)

1) Ethan buys a volleyball for £14.85.  
 What is the price of the change he receives?  
 How much change did he receive?

**£15.00**

\_\_\_\_\_

\_\_\_\_\_

2) Lily buys a chessboard for £19.90.  
 What is the price of the change she receives?  
 How much change did she receive?

**£50.00**

\_\_\_\_\_

\_\_\_\_\_

3) Michael buys a skipping rope for £15.69.  
 What is the price of the change he receives?  
 How much change did he receive?

**£20.00**

\_\_\_\_\_

\_\_\_\_\_

4) Richard buys a skateboard. He pays the cashier £30.00.  
 What is the price of the skateboard?  
 How much change did he receive?

**£30.00**

\_\_\_\_\_

\_\_\_\_\_

5) Nancy buys a basketball. She pays the cashier £50.00.  
 What is the price of the basketball?  
 How much change did she receive?

**£50.00**

\_\_\_\_\_

\_\_\_\_\_

Name : \_\_\_\_\_

**Let's Go Shopping!**

**SPORTING GOODS STORE**

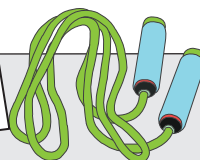
£14.85




£24.95



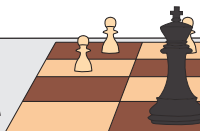
£15.69




£40.45



£19.90



1.99



**PREVIEW**

Gain complete access to the largest collection of worksheets in all subjects!

Members, please log in to download this worksheet.

Not a member? Please sign up to gain complete access.

[www.mathworksheets4kids.com](http://www.mathworksheets4kids.com)

1) Ethan buys a volleyball for £14.85.  
 What is the price of the basketball?  
 How much change did he receive?

£15.00  
 £14.85  
 £0.15

2) Lily buys a chessboard for £19.90.  
 What is the price of the skateboard?  
 How much change did she receive?

£50.00  
 £19.90  
 £30.10

3) Michael buys a skipping rope for £15.69.  
 What is the price of the soccer ball?  
 How much change did he receive?

£20.00  
 £15.69  
 £4.31

4) Richard buys a skateboard. He pays the cashier £30.00.  
 What is the price of the skateboard?  
 How much change did he receive?

£30.00  
 £21.99  
 £8.01

5) Nancy buys a basketball. She pays the cashier £50.00.  
 What is the price of the basketball?  
 How much change did she receive?

£50.00  
 £40.45  
 £9.55